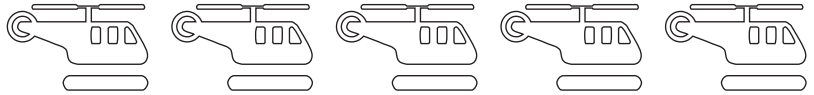




Margotu aurreko zenbakiak
adierazten duen adina garraiobide.


2




4



5



3



Idatzi aurreko eta ondorengo
zenbakiak.

0

2

4

6

3

5

7

9

2

5 6

